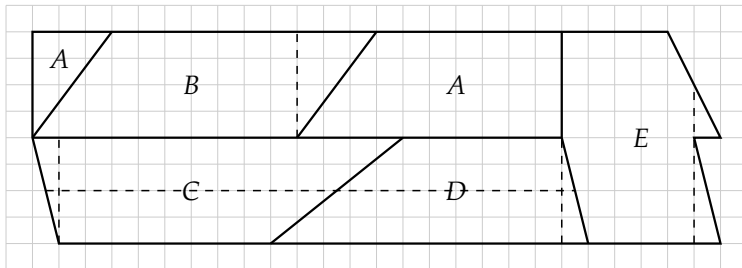
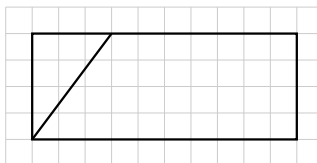


Aufgabe 2

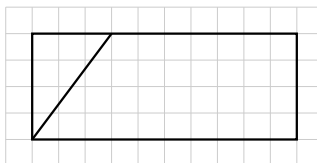


a)

Grundstück A:



Grundstück B:



Grundstück E:



Grundstück C:



Grundstück D:

