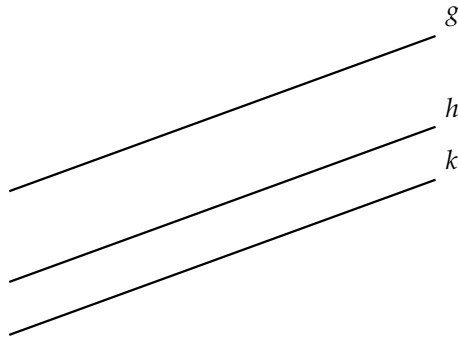
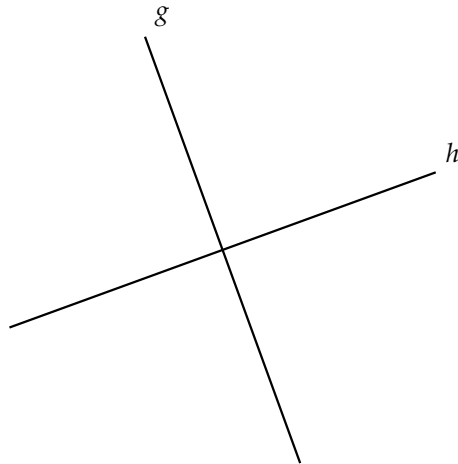


Aufgabe 4

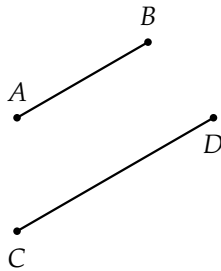
a) $g \parallel h \parallel k$



b) $g \perp h$



c) $\overline{AB} \parallel \overline{CD}$



d) $\overline{AB} = 8 \text{ cm}, \overline{BC} = 6 \text{ cm}$

